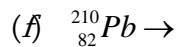
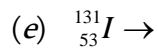
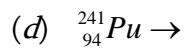
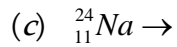
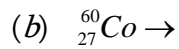
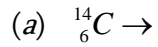


Problems

Name _____

ON A SEPARATE SHEET OF PAPER, solve the following radioactive decay problems using our models for alpha, beta and gamma decay.

1. Write a nuclear equation for **beta decay** for each unstable atom:



2. Write a nuclear equation for **alpha decay** for each unstable atom:

